


Worksheet 1-Further Practice-Time to 5 minutes

Tell Time to 5 Minutes



This clock shows 7 o'clock.

7:00



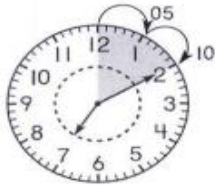
7:05



This clock shows 5 minutes after 7 o'clock.


Use a punchout clock.
Write the time.

1.



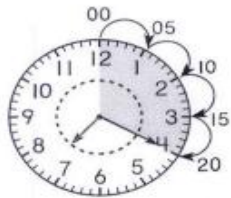
7:10

2.



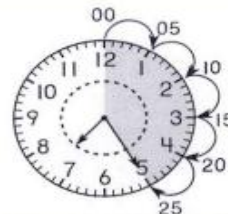
7:_____

3.



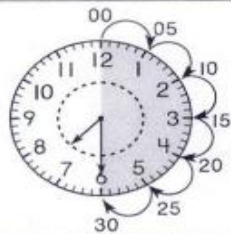
7:_____

4.



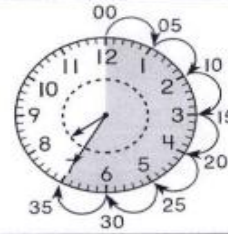
7:_____

5.



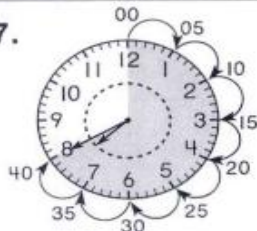
7:_____

6.



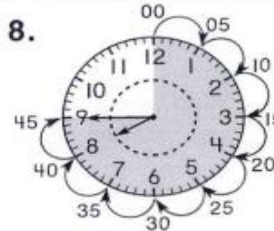
7:_____

7.



7:_____

8.



7:_____

Worksheet 2-Time after the Hour

Time After the Hour

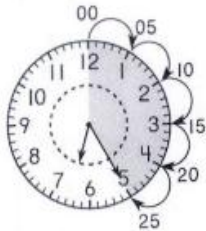
15 minutes after 6



The time is 6: 15.

Count by fives to tell the time.
Write the time.

1. 25 minutes after 6



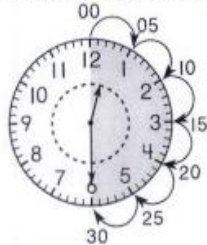
The time is 6: _____.

2. 10 minutes after 5



The time is 5: _____.

3. 30 minutes after 12



The time is 12: _____.

4. 5 minutes after 10



The time is 10: _____.

5. 15 minutes after 2



The time is 2: _____.

6. 20 minutes after 6

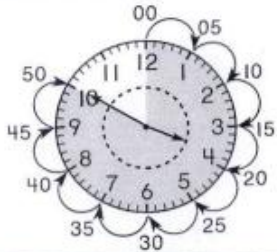


The time is 6: _____.

Worksheet 3-Time before the Hour

Time Before the Hour

10 minutes before 4

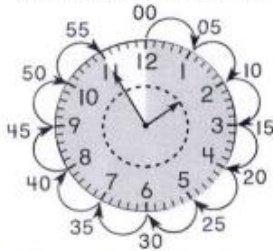


Count by fives!

The time is 3: 50 .

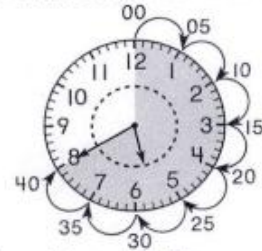
Count by fives to tell the time.
Write the time.

1. 5 minutes before 2



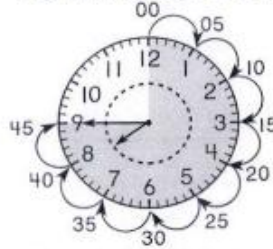
The time is 1: _____ .

2. 20 minutes before 6



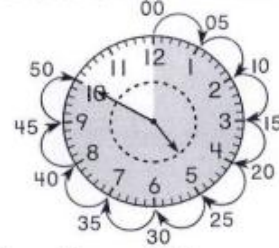
The time is 5: _____ .

3. 15 minutes before 8



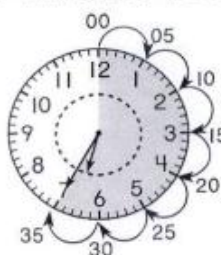
The time is 7: _____ .

4. 10 minutes before 5



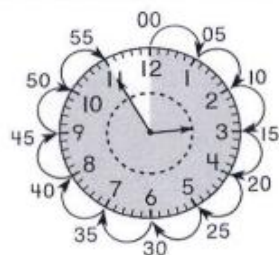
The time is 4: _____ .

5. 25 minutes before 7



The time is 6: _____ .

6. 5 minutes before 3



The time is 2: _____ .